

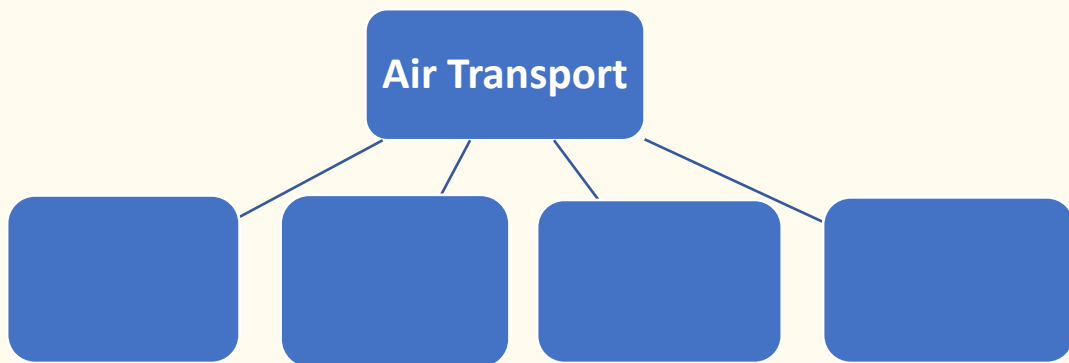
**Class-I WorkSheet**  
**EVS**  
**Travelling Time**  
**Modes of Transport**



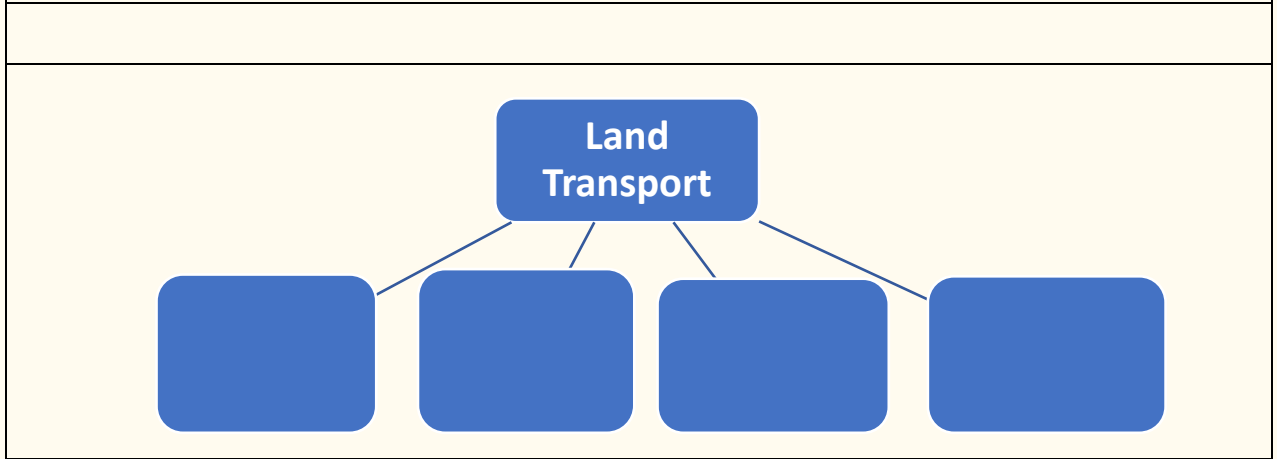
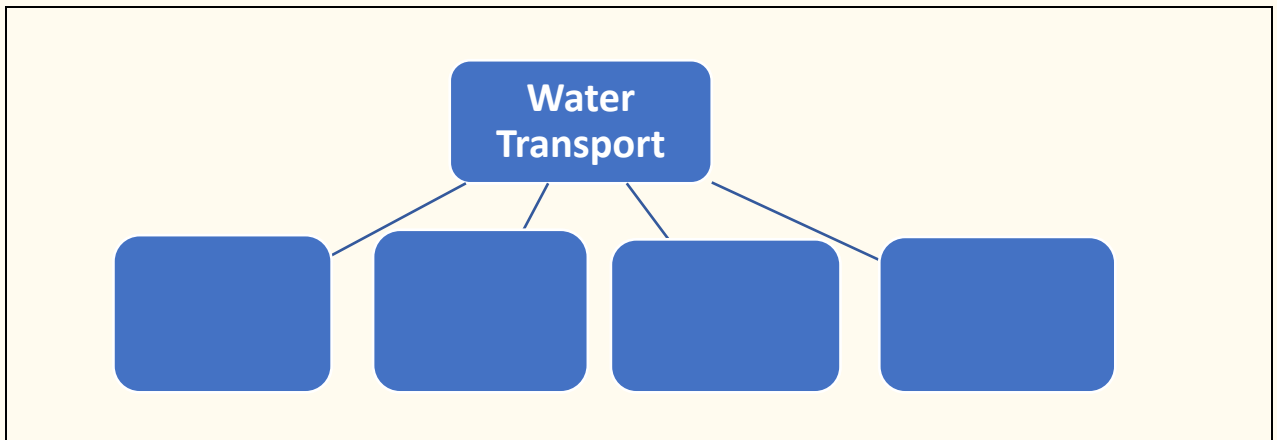
<b>Question-1</b>	<b>Name 2 Vehicles each which have</b>
<b>a</b>	<b>2 Wheels</b> _____
<b>b</b>	<b>3 Wheels</b> _____
<b>c</b>	<b>4 Wheels</b> _____
<b>d</b>	<b>No Wheels</b> _____

<b>Question-2</b>	<b>Which vehicle will you use if you have to</b>
<b>a</b>	<b>Go to London</b> _____
<b>b</b>	<b>Go to nearby market</b> _____
<b>c</b>	<b>Go to nearby park</b> _____
<b>d</b>	<b>Go to another city in India</b> _____
<b>e</b>	<b>Shift your household things</b> _____


**Question-3** Complete the given flow chart by giving example of the following means of transport



**Class-I WorkSheet**  
**EVS**  
**Travelling Time**  
**Modes of Transport**



<b>Question-4</b>	<b>Name 2 vehicles for each of the following</b>
<b>a</b>	<b>Seen in village</b> _____
<b>b</b>	<b>Seen in cities</b> _____
<b>c</b>	<b>Pulled by animals</b> _____
<b>d</b>	<b>Pulled by electric engine</b> _____



**Class-I WorkSheet**  
**EVS**  
**Travelling Time**  
**Modes of Transport**



<b>Question-5(a)</b>	<b>Name 3 vehicles used to carry loads from one place to another</b> _____ _____
<b>b</b>	<b>Name 3 fuels used to move vehicles</b> _____ _____
<b>c</b>	<b>Name the slowest means of transport</b> _____
<b>d</b>	<b>Name the fastest and most expensive means of transportation</b> _____ -
<b>Question-6</b>	<b>Fill in the blanks</b>
<b>a</b>	<b>Metro trans are pulled by _____ engine</b>
<b>b</b>	<b>The means of transport are called _____</b>
<b>c</b>	<b>Water transport is a very _____ means of transport.</b>
<b>d</b>	<b>_____ transport is the fastest meand of transport</b>
<b>Help box</b> <b>Air, Slow, Electric, Vehicles</b>	



**Class-I WorkSheet**  
**EVS**  
**Travelling Time**  
**Modes of Transport**



<b>Question-7</b>	<b>Name the vehicle which stops at</b>
<b>a</b>	<b>Airport _____</b>
<b>b</b>	<b>Port _____</b>
<b>c</b>	<b>Railway Station _____-</b>
<b>d</b>	<b>Bus Stop _____</b>
<b>Question-8</b>	<b>Fill in the blanks</b>
<b>a</b>	<b>Trains have _____ wheels to move on the railway track.</b>
<b>b</b>	<b>Air-conditioned train in big cities which move fast are called _____</b>
<b>c</b>	<b>Astronauts use _____ to go in space.</b>
<b>Question-9</b>	<b>Name the following</b>
<b>a</b>	<b>Two animals used as means of transport</b> _____
<b>b</b>	<b>Two vehicles which have six wheels.</b> _____
<b>c</b>	<b>Draw one land, water and air transport</b>

